




Addition


Name: _____


Find the answers for the additions.



$$\begin{array}{r} 12 \\ + 23 \\ \hline \square \end{array}$$



$$\begin{array}{r} 43 \\ + 25 \\ \hline \square \end{array}$$



$$\begin{array}{r} 37 \\ + 42 \\ \hline \square \end{array}$$



$$\begin{array}{r} 52 \\ + 33 \\ \hline \square \end{array}$$


$$\begin{array}{r} 62 \\ + 39 \\ \hline \square \end{array}$$


$$\begin{array}{r} 47 \\ + 57 \\ \hline \square \end{array}$$


$$\begin{array}{r} 60 \\ + 30 \\ \hline \square \end{array}$$


$$\begin{array}{r} 36 \\ + 67 \\ \hline \square \end{array}$$


$$\begin{array}{r} 43 \\ + 34 \\ \hline \square \end{array}$$