



# Decimal Addition

Name: \_\_\_\_\_


Solve the problems by adding each set of decimals.




$$\begin{array}{r} 2.34 \\ + 1.07 \\ \hline \end{array}$$




$$\begin{array}{r} 8.19 \\ + 2.12 \\ \hline \end{array}$$




$$\begin{array}{r} 3.90 \\ + 9.27 \\ \hline \end{array}$$




$$\begin{array}{r} 18.18 \\ + 22.73 \\ \hline \end{array}$$




$$\begin{array}{r} 74.94 \\ + 40.33 \\ \hline \end{array}$$




$$\begin{array}{r} 65.61 \\ + 33.28 \\ \hline \end{array}$$



$$\begin{array}{r} 26.12 \\ + 17.11 \\ \hline \end{array}$$



$$\begin{array}{r} 88.99 \\ + 56.11 \\ \hline \end{array}$$



$$\begin{array}{r} 56.40 \\ + 67.33 \\ \hline \end{array}$$