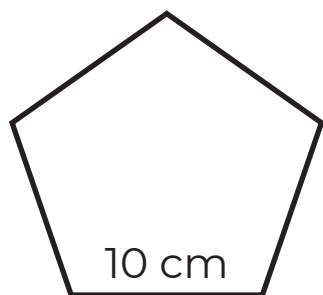


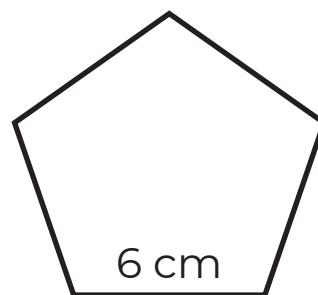
# Pentagon

Name: \_\_\_\_\_

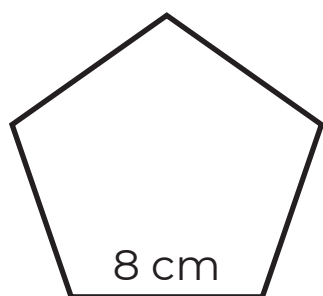
Find the perimeter of these following pentagons.



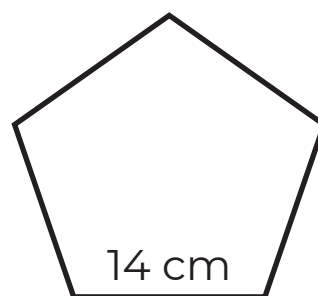
1) Perimeter = \_\_\_\_\_



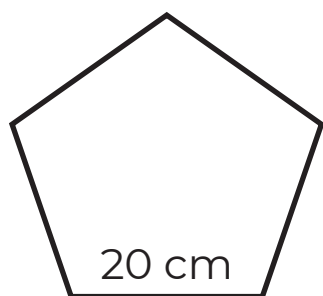
2) Perimeter = \_\_\_\_\_



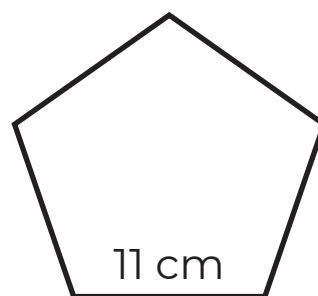
3) Perimeter = \_\_\_\_\_



4) Perimeter = \_\_\_\_\_



5) Perimeter = \_\_\_\_\_



6) Perimeter = \_\_\_\_\_