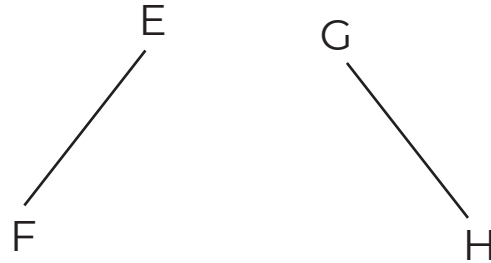


# Let's Choose

Name: \_\_\_\_\_

Find the correct answers for the following.

1) Which of these following lines shows a vertical line?



a) Lines AB

b) Lines CD

c) Lines EF

d) Lines GH

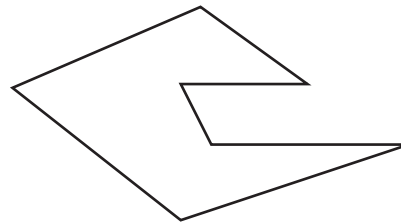
2) How many pairs of parallel lines are there in the figure below?

a) 2

c) 4

b) 2

d) 5



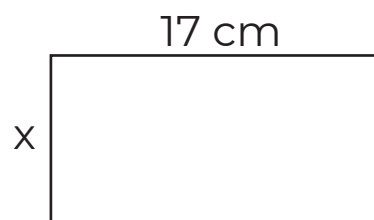
3) The figure below shows a rectangle. If the length of the rectangle is 3 cm more than the width, find x.

a) 15 cm

c) 14 cm

b) 18 cm

d) 20 cm



3) The figure below is not drawn to scale. Find the unknown marked angle in the figure below.

a)  $16^\circ$

c)  $64^\circ$

b)  $42^\circ$

d)  $106^\circ$

