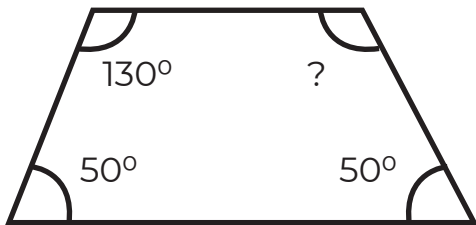


Trapezoid Angles

Name: _____

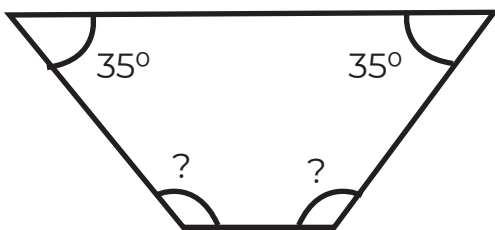
Find the value of each missing angles.



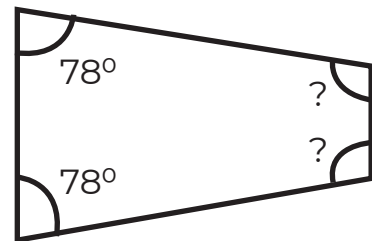
1) Missing angle = _____



2) Missing angle = _____



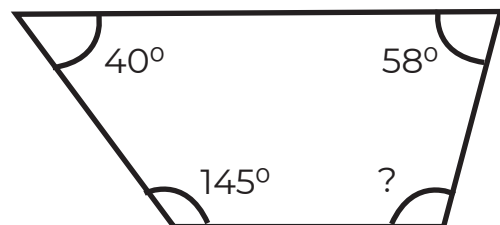
3) Missing angle = _____



4) Missing angle = _____



5) Missing angle = _____



6) Missing angle = _____