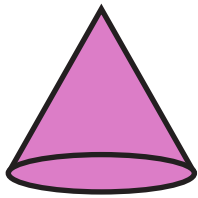



3D Shapes

Name: _____

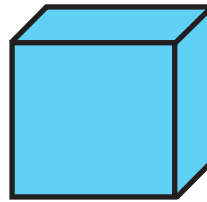
Identify and color all the 3D shapes using the color code.




Cone



Sphere



Cube



Cylinder

