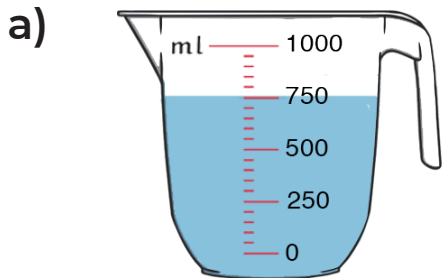


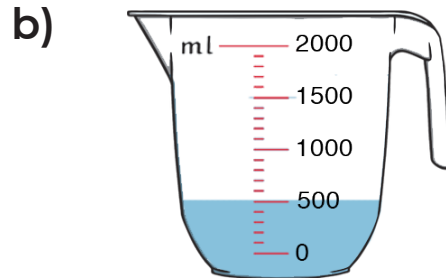
# Measuring Jug

Name: \_\_\_\_\_

1) If you add 200 ml of water in each cup, what would be the new reading?

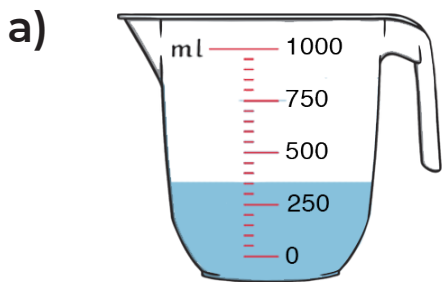


\_\_\_\_\_ ml

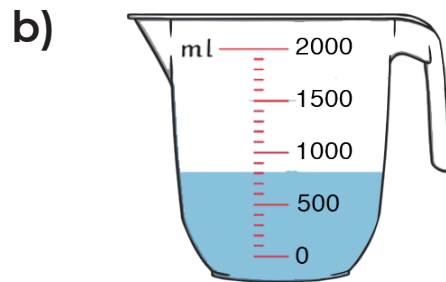


\_\_\_\_\_ ml

2) How much water is required to fill each cup up to 800 ml?

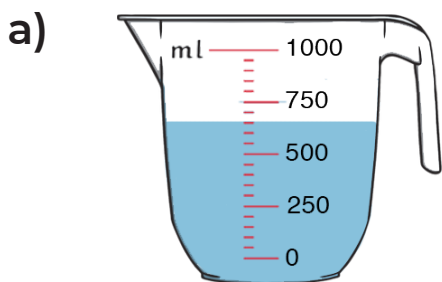


\_\_\_\_\_ ml

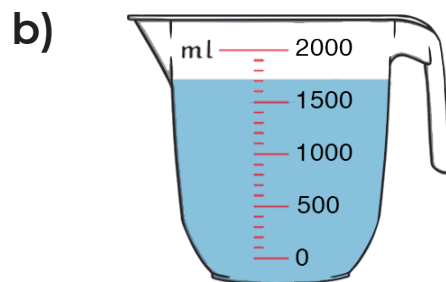


\_\_\_\_\_ ml

3) How much water should you pour out from each jug to drop down the water level to 300 ml?



\_\_\_\_\_ ml



\_\_\_\_\_ ml