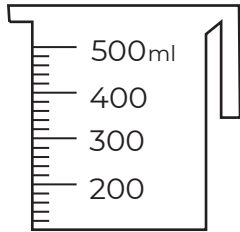


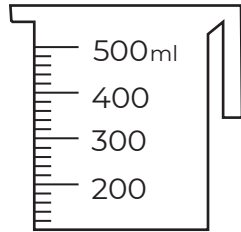
# Volume and Capacity

Name: \_\_\_\_\_

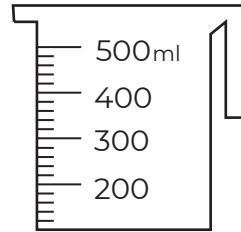
1) Colour to fill each measuring jug to the levels indicated below.



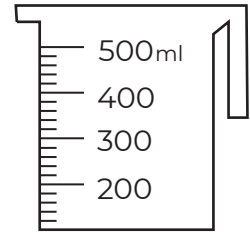
500 ml



320 ml

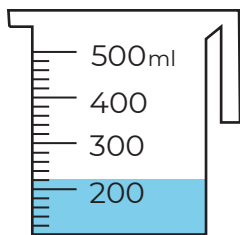


410 ml

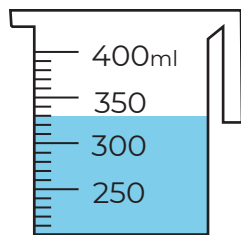


280 ml

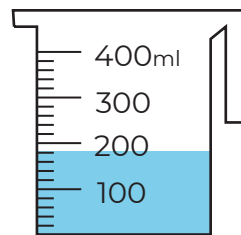
2) How many milliliters of liquid are in each of these measuring cups?



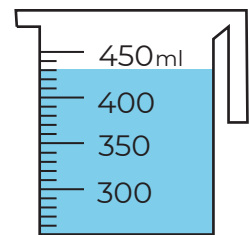
\_\_\_\_\_ ml



\_\_\_\_\_ ml



\_\_\_\_\_ ml



\_\_\_\_\_ ml

3) Colour the amount needed to fill the bucket.

