



# Multiplication

Name: \_\_\_\_\_


Find the answers for the multiplication.




$$\begin{array}{r} 234 \\ \times 12 \\ \hline \end{array}$$




$$\begin{array}{r} 432 \\ \times 21 \\ \hline \end{array}$$




$$\begin{array}{r} 324 \\ \times 11 \\ \hline \end{array}$$




$$\begin{array}{r} 622 \\ \times 31 \\ \hline \end{array}$$




$$\begin{array}{r} 135 \\ \times 21 \\ \hline \end{array}$$




$$\begin{array}{r} 531 \\ \times 22 \\ \hline \end{array}$$



$$\begin{array}{r} 721 \\ \times 13 \\ \hline \end{array}$$



$$\begin{array}{r} 421 \\ \times 31 \\ \hline \end{array}$$



$$\begin{array}{r} 231 \\ \times 32 \\ \hline \end{array}$$